

# BODY SYSTEM

1. LABEL THE ORGANS. THEN, DRAW LINES TO MATCH EACH ORGAN TO THE RIGHT PART OF THE BOY'S BODY:

Lungs

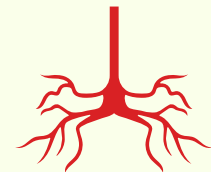
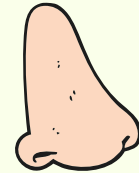
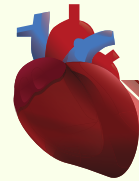

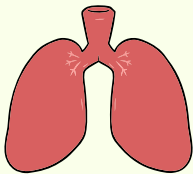
Heart

Brain

Knee

Nose

Veins



2. WRITE THE NAME OF AN ORGAN FROM THESE BODY SYSTEMS:

Respiratory system

Circulatory system

Blank white box for writing the answer.