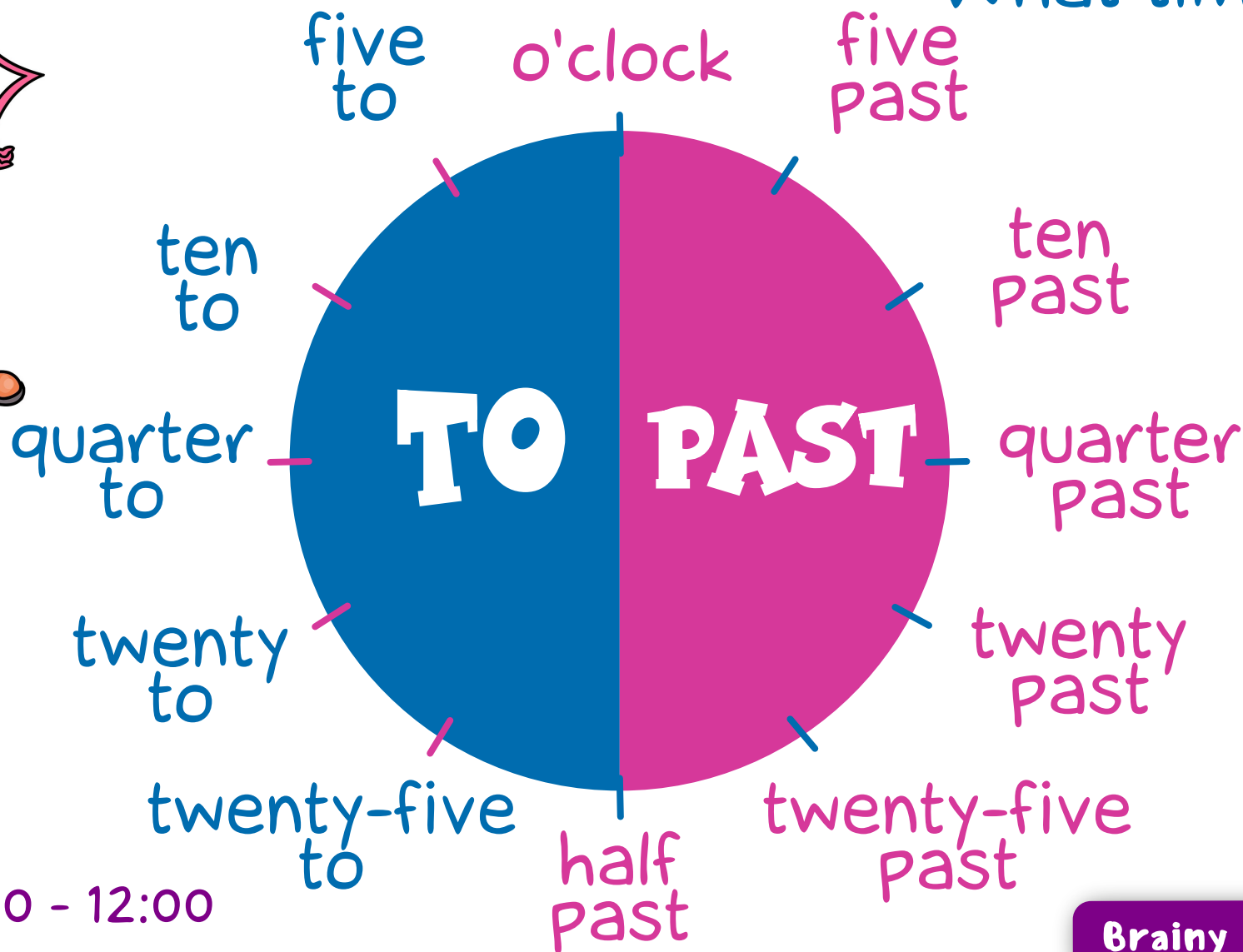


# TELLING THE TIME

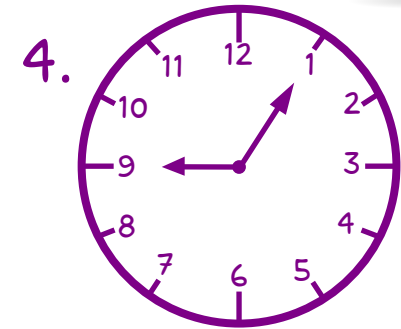

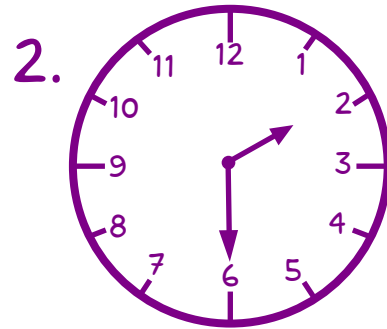
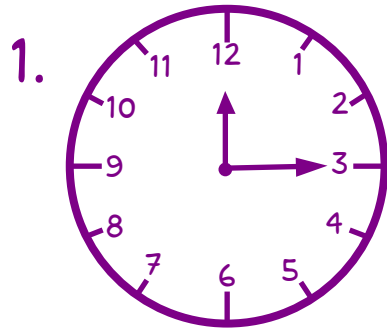



What time is it?



am - 00:00 - 12:00  
pm - 12:00 - 00:00

# WHAT TIME IS IT?



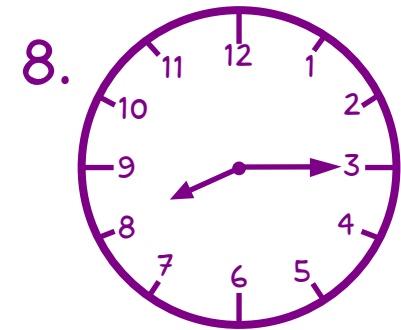
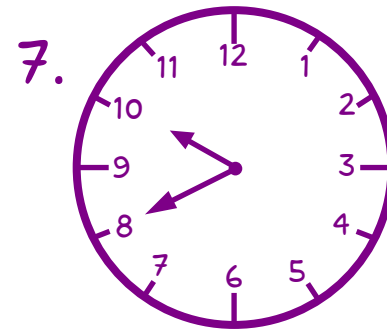
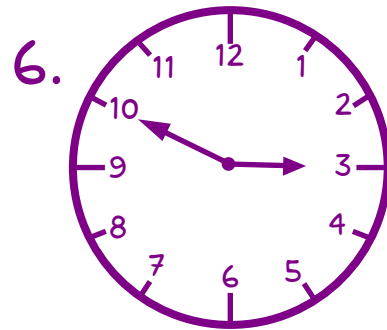
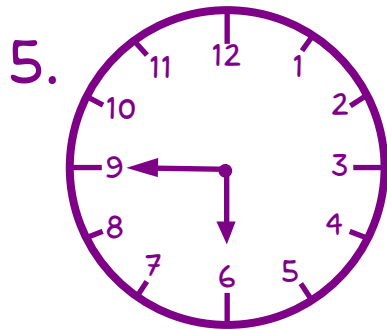
It's ...

\_\_\_\_\_

\_\_\_\_\_

\_\_\_\_\_

\_\_\_\_\_



\_\_\_\_\_

\_\_\_\_\_

\_\_\_\_\_

\_\_\_\_\_



# WHAT TIME IS IT?



Match the time.

Tell the time.

1. It's two to two.		a. 7:55
2. It's twelve o'clock.		b. 2:50
3. It's a quarter to four.		c. 6:25
4. It's twenty five to ten.		d. 3:45
5. It's half past seven.		e. 1:58
6. It's a quarter past six.		f. 9:35
7. It's five to eight.		g. 12:00
8. It's ten past four.		h. 7:30
9. It's ten to three.		i. 6:15
10. It's twenty five past six.		j. 4:10

1. 10:45
2. 8:10
3. 11:50
4. 7:00
5. 2:15
6. 9:30
7. 1:35
8. 5:20
9. 6:25
10. 7:15